

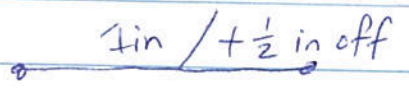

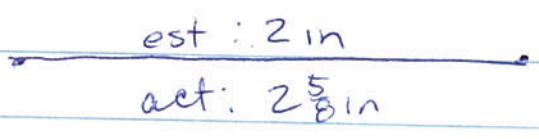
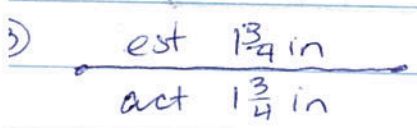
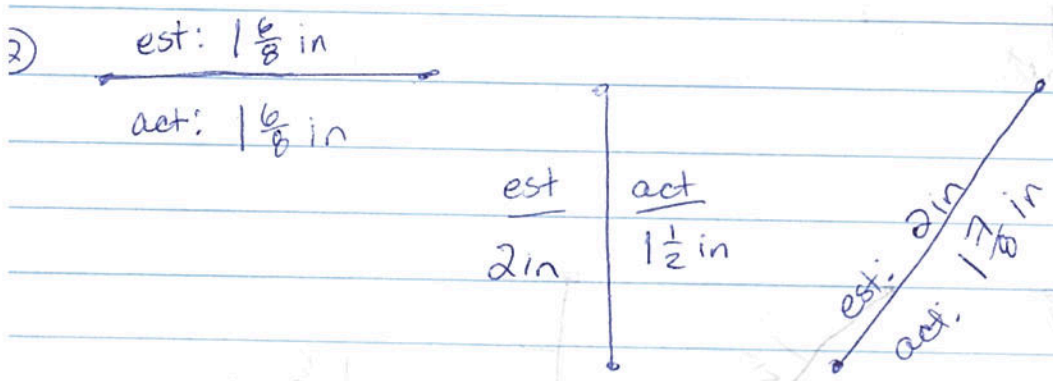
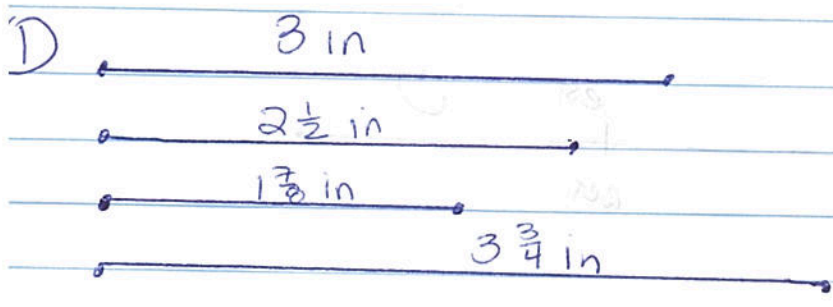







Exercises 1.3A

was found with a scale (1)



⑤ done in the last one



Exercise 1.3B

#3



$AC = 1\frac{1}{3} \text{ in}$

$CD = 2\frac{1}{3} \text{ in}$

$DB = 3\frac{1}{3} \text{ in}$

$x + x + 1 + x + 1 + 1 = 7$

$3x + 3 = 7$

$-3 \quad -3$

$3x = 4$
 $x = \frac{4}{3}$

$x = 1\frac{1}{3} \text{ in}$

$x + 1$

$1\frac{1}{3} + 1$

$2\frac{1}{3}$

$x + 1 + 1$

$1\frac{1}{3} + 1 + 1$

$3\frac{1}{3}$