

TEST 1

Plane Geometry

Sections 1.1–1.14

TRUE/FALSE: Write *true* if the statement is always true; write *false* if it is not always true.
(–3 each)

- | | |
|--------------------------|--|
| _____ <i>true</i> _____ | 1. Two quantities that are equal to the same quantity are equal to each other. |
| _____ <i>true</i> _____ | 2. A straight angle contains 180° . |
| _____ <i>false</i> _____ | 3. A right triangle may also be obtuse. |
| _____ <i>true</i> _____ | 4. An obtuse triangle may have only one obtuse angle. |
| _____ <i>true</i> _____ | 5. If two lines are perpendicular, then they form right angles. |
| _____ <i>true</i> _____ | 6. If a triangle is equilateral, it is also acute. |
| _____ <i>false</i> _____ | 7. If two angles are equal, then they are supplementary. |
| _____ <i>false</i> _____ | 8. A bisector of one angle of a triangle is perpendicular to the side opposite that angle. |
| _____ <i>false</i> _____ | 9. Two angles whose sum is a right angle are said to be supplementary. |
| _____ <i>true</i> _____ | 10. The legs of an isosceles triangle are equal. |
| _____ <i>false</i> _____ | 11. The whole is greater than the sum of its parts. |

ALWAYS, SOMETIMES, NEVER: Select the word which best completes each sentence. Then write A, S, or N in the blank at the left. (–2 each)

- | | |
|----------------------|---|
| _____ <i>S</i> _____ | 12. Two angles that have a common side are _____ adjacent. |
| _____ <i>A</i> _____ | 13. If equal quantities are multiplied by equal quantities, the products are _____ equal. |
| _____ <i>A</i> _____ | 14. If two straight lines intersect, the vertical angles formed are _____ equal. |

(continued)

- S 15. Two angles that are supplementary are ? equal.
- A 16. An equilateral triangle is ? equiangular.
- N 17. Three angles that have a sum of 90° are ? complementary.
- A 18. A bisector of a line segment ? passes through the midpoint of the segment.
- A 19. The bisectors of two adjacent supplementary angles are ? perpendicular to each other.
- S 20. An obtuse triangle is ? isosceles.
- A 21. The supplement of a right angle is ? a right angle.

MULTIPLE CHOICE: Write the letter of the correct answer. (*-2 each*)

- b 22. A scalene triangle has ?.
a. two sides equal c. three sides equal
b. no sides equal d. none of these
- c 23. If the non-common sides of two adjacent angles lie in opposite directions on a straight line, then the two angles are ?.
a. equal c. supplementary
b. complementary d. none of these
- d 24. An angle of 90° is ?.
a. an oblique angle c. a reflex angle
b. an obtuse angle d. none of these
- b 25. If two lines are perpendicular, they form at the point of intersection ?.
a. acute angles c. obtuse angles
b. right angles d. none of these
- a 26. A line segment has ?.
a. two endpoints c. no endpoints
b. one endpoint d. none of these
- a 27. If the sum of two angles is an obtuse angle, at least one of the angles *must* be ?.
a. acute c. obtuse
b. right d. none of these
- b 28. As the size of an angle increases, the size of its supplement ?.
a. increases c. remains the same
b. decreases d. none of these

Name _____

Test 1, page 3

Plane Geometry

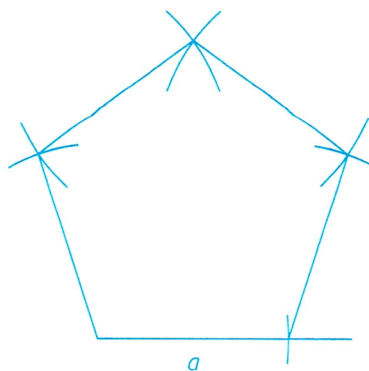
COMPLETION: Write the correct answer in the blank at the left. (*-2 each*)

- hypotenuse 29. In a right triangle, the side that is opposite the right angle is called the ____.
- equal 30. If two angles are vertical angles, then they are ____.
- sums 31. If equal quantities are added to equal quantities, the ____ are equal.
- remainders
(or differences) 32. If equal quantities are subtracted from equal quantities, the ____ are equal.
- T 33. If an angle is labeled *RTS* the vertex lies at point ____.
- acute 34. If two angles, neither of which is a right angle, are complementary, they must both be ____.
- 45° 35. If two angles are both equal and complementary, their measures are ____.
- 45° 36. If a polygon has 8 sides, the size of an angle at the center is ____.
- obtuse 37. The supplement of an acute angle is a(n) ____ angle.
- equal 38. If two quantities are equal to the same quantity, or to equal quantities, then they are ____.

CONSTRUCTIONS: Construct each figure according to the given description. (*-2 each*)

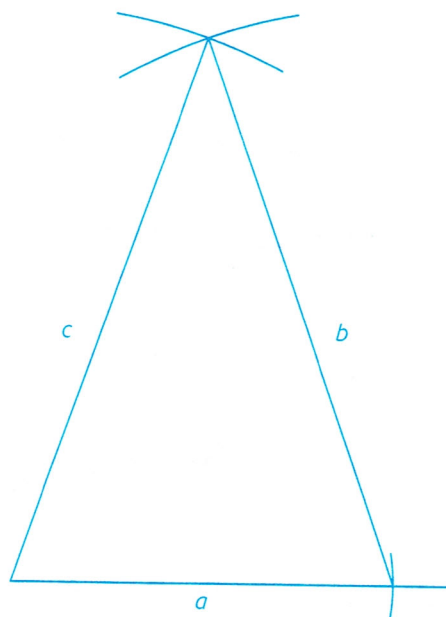

39. Construct a regular polygon of five sides, with each side equal to the given segment *a*. (Use your protractor to draw the angles.)

_____ *a*

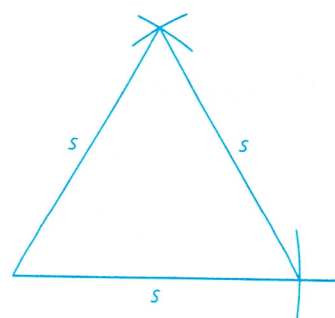
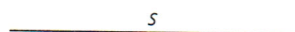


(continued)

40. Construct a triangle with sides of the given lengths.



41. Construct a triangle which has all three sides equal to the given length.



Name _____

Test 1, page 5

Plane Geometry

42. Draw a triangle that has the given base and base angles of 65° and 35° .

