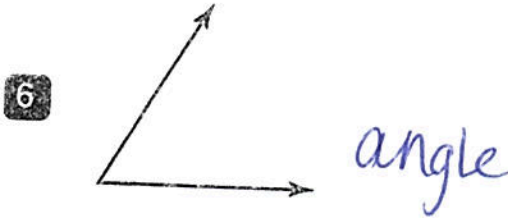
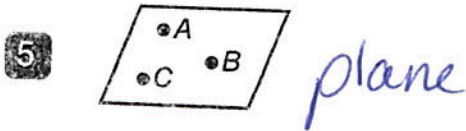
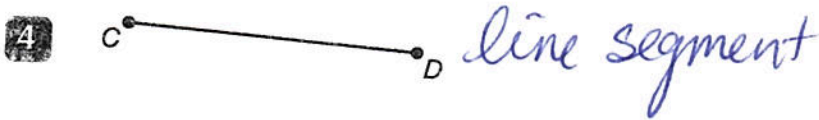
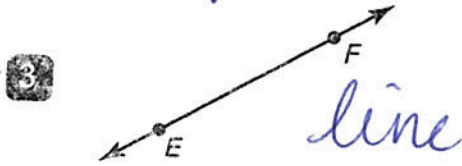



# Terms of Geometry

Match each figure with its name.



F angle

C line

B line segment

I plane

E point

A ray

Match each definition with the correct term.

7 a location in space with no size point

8 part of a line that has two endpoints line segment

9 part of a line that has one endpoint and extends in one direction without end ray

10 a straight path that extends in both directions without end line

11 a flat surface that extends in all directions without end plane

12 a figure formed by two rays that share a common endpoint angle

K angle

H line

L line segment

J plane

G point

D ray



Objective: Recognize and define point, line, plane, line segment, ray, and angle.